





















Match the shops and the descriptions.

- | | | | |
|-------------------------|--|-----------------------|-------------|
| <input type="radio"/> 1 | This shop sells writing materials and paper goods. | <input type="radio"/> | butcher's |
| <input type="radio"/> 2 | This shop sells medicine, tablets and pills. | <input type="radio"/> | stationer's |
| <input type="radio"/> 3 | This shop sells different kinds of meat, like chicken or pork. | <input type="radio"/> | newsagent's |
| <input type="radio"/> 4 | This shop sells newspapers, magazines and sweets. | <input type="radio"/> | chemist's |

Count the coins. Match the money and the objects.

<input type="radio"/> 5	   	=	<input type="text"/>	<input type="radio"/>	
<input type="radio"/> 6	   	=	<input type="text"/>	<input type="radio"/>	
<input type="radio"/> 7	   	=	<input type="text"/>	<input type="radio"/>	
<input type="radio"/> 8	   	=	<input type="text"/>	<input type="radio"/>	

Match the shops and the descriptions.

- | | |
|--|---------------|
| ① This shop sells writing materials and paper goods. | ③ butcher's |
| ② This shop sells medicine, tablets and pills. | ① stationer's |
| ③ This shop sells different kinds of meat, like chicken or pork. | ④ newsagent's |
| ④ This shop sells newspapers, magazines and sweets. | ② chemist's |

Count the coins. Match the money and the objects.

⑤	 $=$ 	⑦	
⑥	 $=$ 	⑧	
⑦	 $=$ 	⑤	
⑧	 $=$ 	⑥	