




Match the shops and the descriptions.

- |                                                                  |               |
|------------------------------------------------------------------|---------------|
| ① This shop sells writing materials and paper goods.             | ③ butcher's   |
| ② This shop sells medicine, tablets and pills.                   | ① stationer's |
| ③ This shop sells different kinds of meat, like chicken or pork. | ④ newsagent's |
| ④ This shop sells newspapers, magazines and sweets.              | ② chemist's   |

Count the coins. Match the money and the objects.

⑤		=	57c	⑦	
⑥		=	35c	⑧	
⑦		=	66c	⑤	
⑧		=	71c	⑥	