









Match the shops and the descriptions.

- |   |                                   |
|---|-----------------------------------|
| <p>① This shop sells writing materials and paper goods.</p>             | <input type="radio"/> butcher's   |
| <p>② This shop sells medicine, tablets and pills.</p>                   | <input type="radio"/> stationer's |
| <p>③ This shop sells different kinds of meat, like chicken or pork.</p> | <input type="radio"/> newsagent's |
| <p>④ This shop sells newspapers, magazines and sweets.</p>              | <input type="radio"/> chemist's   |


Count the coins. Match the money and the objects.

<p>⑤</p>		=	<input type="text"/>	<input type="radio"/>	
<p>⑥</p>		=	<input type="text"/>	<input type="radio"/>	
<p>⑦</p>		=	<input type="text"/>	<input type="radio"/>	
<p>⑧</p>		=	<input type="text"/>	<input type="radio"/>	

Match the shops and the descriptions.

- |  |               |
|--|---------------|
| ① This shop sells writing materials and paper goods.             | ③ butcher's   |
| ② This shop sells medicine, tablets and pills.                   | ① stationer's |
| ③ This shop sells different kinds of meat, like chicken or pork. | ④ newsagent's |
| ④ This shop sells newspapers, magazines and sweets.              | ② chemist's   |

Count the coins. Match the money and the objects.

⑤	 $=$ 	⑦	
⑥	 $=$ 	⑧	
⑦	 $=$ 	⑤	
⑧	 $=$ 	⑥	